

Year 2 Maths for Home Learning week beginning 13th July 2020

Daily Lessons

All year groups are to participate in the White Rose daily maths lesson by visiting <https://whiterosemaths.com/homelearning/>, selecting Year 2 on the right hand side and selecting Week 11.

Additional Activities in Support of the White Rose Lessons for this week (if required/desired)

Practical ideas:

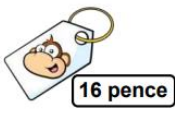




<https://www.educationquizzes.com/ks1/maths/year-2-measurements-temperature/>




Look at different containers. What is their capacity? Can you line them up in order?

<https://nrich.maths.org/6971/note>

<https://nrich.maths.org/10656/note>

Key Skills – these are to keep the children ticking over (if you have time)

Mon	<p>Problem solving this week</p> <p>Choose one of these symbols</p> <p style="text-align: center;">$<$, $>$ or $=$</p> <p>to make the number sentences correct.</p> <p style="text-align: center;">$24 + 5$ ○ $24 + 6$</p> <p style="text-align: center;">$18 + 3$ ○ $17 + 4$</p> <p style="text-align: center;">$33 + 15$ ○ $40 + 8$</p>
Tues	<p>Mary buys these two items.</p> <div style="display: flex; align-items: center; justify-content: center;"><div style="text-align: center;"><p>16 pence</p></div><div style="margin: 0 20px;"></div><div style="text-align: center;"><p>19 pence</p></div></div> <p>She pays with the following coin.</p> <div style="text-align: center;"></div> <p>Here is the change she is given.</p> <div style="display: flex; justify-content: center; align-items: center;"><div style="text-align: center;"><p>10</p></div><div style="margin: 0 10px;"><p>5</p></div></div> <p>Has she been given the correct change?</p>

<p>Wed</p>	<p>I If</p> $\square + \square + \square = 18$ $\bigcirc + \bigcirc = 18$ <p>Work out</p> $\square + \bigcirc$
<p>Thurs</p>	<p>I Sasha is playing a game to win prizes.</p> <p>Each blue counter is worth 2 points.</p> <p>Each green counter is worth 5 points.</p> <p>She wins the following counters.</p>  <p>Which of these prizes can Sasha get?</p>  <p>50 points 25 points 30 points 40 points</p>
<p>Fri</p>	<p>Des has some oranges.</p> <p>He packs them into boxes.</p> <p>Each box holds 5 oranges.</p>  <p>He fills 7 boxes.</p> <p>He has 29 oranges left.</p> <p>How many oranges does he have in total?</p>

